

# THANK YOU!

Thank you for your downloading this product!  
I hope you love this resource as much as we do.

Please contact me if you have any questions at all  
[michala@keepingmykiddobusy.com](mailto:michala@keepingmykiddobusy.com)

*I am always happy to help.*

Let's be friends! Click any of the buttons below.



# TERMS OF USE

♥ All pages in this resource are © Keeping My Kiddo Busy, LLC 2020

♥ This license is for individual use only. If you wish to share with another teacher, please direct them to my [store](#). If an entire school or district intends to use this resource, please purchase the appropriate license.

♥ It is strictly forbidden by the DMCA to sell or share this resource on any website. If you are a teacher, you may upload and share this resource with your students on your password protected virtual classroom.

**TpT Keeping My Kinders Busy**  
**[keepingmykiddobusy.com](http://keepingmykiddobusy.com)**



Away with the Pixels

Graphics and font thanks to:







# Language Arts

## April

### Level 1 • Day 1

Phonics  
Reading  
Writing

Name: \_\_\_\_\_

**A \_ E**

Write the words on the dotted lines.



\_\_\_\_\_



\_\_\_\_\_

*Final*  
**BLENDS**

Fill in: **ld** **lf** **lk**



mi \_\_\_\_\_



she \_\_\_\_\_



wor \_\_\_\_\_

## READING



Mom and I like to bake together.  
We like to bake pies and cakes.  
One day, I made a pumpkin pie.  
It was so much fun to make.



Color all of the a\_e words

blue

Do they like to bake?

yes

no

## WRITING

Write 1-2 sentences using the picture word bank.

ingredients



oven



cake



bowl



spatula



\_\_\_\_\_

\_\_\_\_\_

\_\_\_\_\_

# Primary Math

## April

## Level 1 • Day 1

Coins  
Add/subtract  
multiples of 10  
Skip count

Name: \_\_\_\_\_

### Adding COINS

Use the chart below to help you skip count and find the answers.



5¢



nickel



¢



¢

1	2	3	4	5	6	7	8	9	10
11	12	13	14	15	16	17	18	19	20
21	22	23	24	25	26	27	28	29	30
31	32	33	34	35	36	37	38	39	40
41	42	43	44	45	46	47	48	49	50
51	52	53	54	55	56	57	58	59	60
61	62	63	64	65	66	67	68	69	70
71	72	73	74	75	76	77	78	79	80
81	82	83	84	85	86	87	88	89	90
91	92	93	94	95	96	97	98	99	100
101	102	103	104	105	106	107	108	109	110
111	112	113	114	115	116	117	118	119	120

### TEN Multiples

Use the chart to help you find the answers.

$$\begin{array}{r} + 26 \\ + 10 \\ \hline \end{array} \quad \begin{array}{r} + 26 \\ + 20 \\ \hline \end{array} \quad \begin{array}{r} + 26 \\ + 30 \\ \hline \end{array}$$

$$\begin{array}{r} - 77 \\ - 10 \\ \hline \end{array} \quad \begin{array}{r} - 77 \\ - 20 \\ \hline \end{array} \quad \begin{array}{r} - 77 \\ - 30 \\ \hline \end{array}$$

### Count by TENS

Fill in the missing numbers.





# Language Arts

## April

### Level 1 • Day 2

Phonics  
Reading  
Writing

Name: \_\_\_\_\_

**I - E**

Write the words on the dotted lines.



\_\_\_\_\_



\_\_\_\_\_

*Final*  
**BLENDS**

Fill in: **ld** **lf** **lb**



go

\_\_\_\_\_



bu


\_\_\_\_\_



wo

\_\_\_\_\_

## READING



Jen likes to fly her white kite.  
She runs fast so the kite flies.  
Her white kite flies in the sky.  
A string makes a line to the kite.

Color all of the **i\_e** words



What color is the kite?

green

white

## WRITING

Write 1-2 sentences using the picture word bank.

kite



white



slide



time



prize



\_\_\_\_\_

\_\_\_\_\_

\_\_\_\_\_

# Primary Math

## April

## Level 1 • Day 2

Coins  
Add/subtract  
multiples of 10  
Skip count

Name: \_\_\_\_\_

### Adding COINS

10¢



dime

Use the chart below to help you skip count and find the answers.



1	2	3	4	5	6	7	8	9	10
11	12	13	14	15	16	17	18	19	20
21	22	23	24	25	26	27	28	29	30
31	32	33	34	35	36	37	38	39	40
41	42	43	44	45	46	47	48	49	50
51	52	53	54	55	56	57	58	59	60
61	62	63	64	65	66	67	68	69	70
71	72	73	74	75	76	77	78	79	80
81	82	83	84	85	86	87	88	89	90
91	92	93	94	95	96	97	98	99	100
101	102	103	104	105	106	107	108	109	110
111	112	113	114	115	116	117	118	119	120

### TEN Multiples

Use the chart to help you find the answers.

$$\begin{array}{r} + 49 \\ 10 \\ \hline \end{array} \quad \begin{array}{r} + 49 \\ 20 \\ \hline \end{array} \quad \begin{array}{r} + 49 \\ 30 \\ \hline \end{array}$$

$$\begin{array}{r} - 61 \\ 10 \\ \hline \end{array} \quad \begin{array}{r} - 61 \\ 20 \\ \hline \end{array} \quad \begin{array}{r} - 61 \\ 30 \\ \hline \end{array}$$

### Count by TENS

Fill in the missing numbers.



# Language Arts

## April

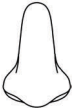
### Level 1 • Day 3

Phonics  
Reading  
Writing

Name: \_\_\_\_\_

**O \_ E**

Write the words on the dotted lines.



\_\_\_\_\_



\_\_\_\_\_

*Final*  
**BLENDS**

Fill in: **rk rn ld**



co \_\_\_\_\_




sha \_\_\_\_\_



ba \_\_\_\_\_

## READING



I planted a new rose.

My nose loves the smell of roses.

I water my rose with the hose.

Roses need sun, water and soil.



Color all of the o \_ e words



What did he plant?

rose

berries

## WRITING

Write 1-2 sentences using the picture word bank.

hose



rose



seeds



water



soil



\_\_\_\_\_

\_\_\_\_\_

\_\_\_\_\_



# Primary Math

## April

## Level 1 • Day 3

Coins  
Add/subtract  
multiples of 10  
Skip count

Name: \_\_\_\_\_

### Adding COINS

Use the chart below to help you skip count and find the answers.



1¢



penny



¢



¢

### TEN Multiples

Use the chart to help you find the answers.

$$\begin{array}{r} + 73 \\ 10 \\ \hline \end{array}$$

$$\begin{array}{r} + 73 \\ 20 \\ \hline \end{array}$$

$$\begin{array}{r} + 73 \\ 30 \\ \hline \end{array}$$

$$\begin{array}{r} - 61 \\ 10 \\ \hline \end{array}$$

$$\begin{array}{r} - 61 \\ 20 \\ \hline \end{array}$$

$$\begin{array}{r} - 61 \\ 30 \\ \hline \end{array}$$

1	2	3	4	5	6	7	8	9	10
11	12	13	14	15	16	17	18	19	20
21	22	23	24	25	26	27	28	29	30
31	32	33	34	35	36	37	38	39	40
41	42	43	44	45	46	47	48	49	50
51	52	53	54	55	56	57	58	59	60
61	62	63	64	65	66	67	68	69	70
71	72	73	74	75	76	77	78	79	80
81	82	83	84	85	86	87	88	89	90
91	92	93	94	95	96	97	98	99	100
101	102	103	104	105	106	107	108	109	110
111	112	113	114	115	116	117	118	119	120

### Count by TENS

Fill in the missing numbers.



# Language Arts

## April

### Level 1 • Day 4

Phonics  
Reading  
Writing

Name: \_\_\_\_\_

**U \_ E**

Write the words on the dotted lines.




\_\_\_\_\_



\_\_\_\_\_

*Final*  
**BLENDS**

Fill in: **rn rt rd**



ya \_\_\_\_\_




bi \_\_\_\_\_



ca \_\_\_\_\_

## READING



Jess and Jack like summer.

They like to swim on tubes.

The tubes are fun in the pool.

They like cold drinks with ice cubes.

Color all of the **u \_ e** words

blue

What do they swim on?

cubes

tubes

## WRITING

Write 1-2 sentences using the picture word bank.

ball



pool



swimming



swimsuit



tube



# Primary Math

April

Level 1 • Day 4

Coins

Add/subtract multiples of 10

Skip count

Name: \_\_\_\_\_

## Adding COINS

Use the chart below to help you skip count and find the answers.



**25¢**  
quarter



1	2	3	4	5	6	7	8	9	10
11	12	13	14	15	16	17	18	19	20
21	22	23	24	25	26	27	28	29	30
31	32	33	34	35	36	37	38	39	40
41	42	43	44	45	46	47	48	49	50
51	52	53	54	55	56	57	58	59	60
61	62	63	64	65	66	67	68	69	70
71	72	73	74	75	76	77	78	79	80
81	82	83	84	85	86	87	88	89	90
91	92	93	94	95	96	97	98	99	100
101	102	103	104	105	106	107	108	109	110
111	112	113	114	115	116	117	118	119	120

## TEN Multiples

Use the chart to help you find the answers.

$$\begin{array}{r} + 24 \\ + 10 \\ \hline \end{array} \quad \begin{array}{r} + 24 \\ + 20 \\ \hline \end{array} \quad \begin{array}{r} + 24 \\ + 30 \\ \hline \end{array}$$

$$\begin{array}{r} - 96 \\ - 10 \\ \hline \end{array} \quad \begin{array}{r} - 96 \\ - 20 \\ \hline \end{array} \quad \begin{array}{r} - 96 \\ - 30 \\ \hline \end{array}$$

## Count by TENS

Fill in the missing numbers.





# Language Arts

## April

### Level 1 • Day 5

Phonics  
Reading  
Writing

Name: \_\_\_\_\_

**A \_ E**

Write the words on the dotted lines.



\_\_\_\_\_



\_\_\_\_\_

*Final*  
**BLENDS**

Fill in: **rm rp rd**



ca \_\_\_\_\_



wo \_\_\_\_\_



ha \_\_\_\_\_

## READING



We picked a date to go on a hike.  
We hiked up to the big lake.  
The big lake was blue and warm.  
There is a cave next to the lake.



Color all of the a\_e words



What color is the lake?

red

blue

## WRITING

Write 1-2 sentences using the picture word bank.

lake




hike



cave



picnic



family



\_\_\_\_\_

\_\_\_\_\_

\_\_\_\_\_

# Primary Math

## April

## Level 1 • Day 5

Coins  
Add/subtract  
multiples of 10  
Skip count

Name: \_\_\_\_\_

### Adding COINS

Use the chart below to help you skip count and find the answers.  
Write the value under each coin if it is helpful.



¢



¢

### TEN Multiples

Use the chart to help you find the answers.

$$\begin{array}{r} + 42 \\ 10 \\ \hline \end{array}$$

$$\begin{array}{r} + 42 \\ 20 \\ \hline \end{array}$$

$$\begin{array}{r} + 42 \\ 30 \\ \hline \end{array}$$

$$\begin{array}{r} - 68 \\ 10 \\ \hline \end{array}$$

$$\begin{array}{r} - 68 \\ 20 \\ \hline \end{array}$$

$$\begin{array}{r} - 68 \\ 30 \\ \hline \end{array}$$

### Count by TENS

Fill in the missing numbers.

1	2	3	4	5	6	7	8	9	10
11	12	13	14	15	16	17	18	19	20
21	22	23	24	25	26	27	28	29	30
31	32	33	34	35	36	37	38	39	40
41	42	43	44	45	46	47	48	49	50
51	52	53	54	55	56	57	58	59	60
61	62	63	64	65	66	67	68	69	70
71	72	73	74	75	76	77	78	79	80
81	82	83	84	85	86	87	88	89	90
91	92	93	94	95	96	97	98	99	100
101	102	103	104	105	106	107	108	109	110
111	112	113	114	115	116	117	118	119	120



**STANDARDS BASED** and **ENGAGING**  
for the entire school year!

Did you love the free week?

**CLICK HERE**

to purchase the  
entire month.



© Keeping My Kiddo Busy 2020 keepingmykiddobusy.com

**SAVE BIG**

*With the year long*

**BUNDLE**

**CLICK HERE**

