

THANK YOU!

Thank you for your downloading this product!
I hope you love this resource as much as we do.

Please contact me if you have any questions at all
michala@keepingmykiddobusy.com

I am always happy to help.

Let's be friends! Click any of the buttons below.



TERMS OF USE

♥ All pages in this resource are © Keeping My Kiddo Busy, LLC 2020

♥ This license is for individual use only. If you wish to share with another teacher, please direct them to my [store](#). If an entire school or district intends to use this resource, please purchase the appropriate license.

♥ It is strictly forbidden by the DMCA to sell or share this resource on any website. If you are a teacher, you may upload and share this resource with your students on your password protected virtual classroom.

TpT Keeping My Kinders Busy
keepingmykiddobusy.com



Away with the Pixels

Graphics and font thanks to:



How To Use This Print & Teach Pack

To use for morning work, bell ringers, daily warm up or review, simply print the activities (front to back or individually).

Primary Math
December Level 1 • Day 17

Name: _____

MAKING TEN
Use the ten frame to help you solve the equation.

5 + _____ = 10 8 + _____ = 10 1 + _____ = 10

Double DOUBLES
Let's memorize our doubles facts!

1 • 1 = _____ 4 • 4 = _____ 7 • 7 = _____
2 • 2 = _____ 5 • 5 = _____ 8 • 8 = _____
3 • 3 = _____ 6 • 6 = _____ 9 • 9 = _____

Counting By TENS
40 _____ 20

Language Arts
December Level 1 • Day 17

Name: _____

Word Endings
Add -ing to each word. Then write the word on your own.

look + _____ = _____
pull + _____ = _____

SIGHT WORDS
Unscramble the sight words.


ddi otn dsai fof

WORD FAMILIES
-ake -ive

Spell it on your own.

c _____ dr _____
b _____ f _____
r _____ h _____

Pick one word and write a complete sentence.



Daily Language Arts

Daily Math

Classroom ✨ Homeschool ✨ Virtual Teaching



Daily Warm Ups / Review



Bell Ringers



Small group instruction



Homework



December Daily Review

Color the star when you complete your daily assignments.

My Name: _____

Day 1

Language Arts
December
csh [] [] fan [] []
his is my friend jae
the has a string of

Primary Math
December
22 28
23 29

Read for 20 minutes

Day 2

Language Arts
December
snde [] [] yett [] []
can we go with you

Primary Math
December
25 28
26 29

Read for 20 minutes

Day 3

Language Arts
December
erren [] [] can [] []
can you see me

Primary Math
December
23 28
24 29

Read for 20 minutes

Day 4

Language Arts
December
sag [] [] ten [] []
I like to watch movies

Primary Math
December
22 28
23 29

Read for 20 minutes

Day 5

Language Arts
December
nias [] [] mait [] []
jads birthday is on sundy

Primary Math
December
24 30
25 31

Read for 20 minutes

Day 6

Language Arts
December
dop [] [] inf [] []
my mom is so nice

Primary Math
December
32 35
33 36

Read for 20 minutes

Day 7

Language Arts
December
oh [] [] em [] []
I live in teash

Primary Math
December
31 34
32 35
33 36

Read for 20 minutes

Day 8

Language Arts
December
sem [] [] ba [] []
I like to play outside

Primary Math
December
36 39
37 40
38 41

Read for 20 minutes

Day 9

Language Arts
December
hen [] [] wha [] []
I see two horses

Primary Math
December
35 38
36 39

Read for 20 minutes

Day 10

Language Arts
December
ke [] [] str [] []
my teacher is mrs smith

Primary Math
December
35 38
36 39

Read for 20 minutes

Day 11

Language Arts
December
ch [] [] noo [] []
I am

Primary Math
December
31 34
32 35
33 36

Read for 20 minutes

Day 12

Language Arts
December
oon [] [] utt [] []
I am

Primary Math
December
31 34
32 35
33 36

Read for 20 minutes

Day 13

Language Arts
December
sho [] [] gte [] []
I see

Primary Math
December
35 38
36 39

Read for 20 minutes

Day 14

Language Arts
December
shve [] [] oye [] []
I see

Primary Math
December
35 38
36 39

Read for 20 minutes

Day 15

Language Arts
December
shw [] [] og [] []
I see

Primary Math
December
31 34
32 35
33 36

Read for 20 minutes

Day 16

Language Arts
December
sh [] [] f [] []
I see

Primary Math
December
31 34
32 35
33 36

Read for 20 minutes

Day 17

Language Arts
December
sh [] [] of [] []
I see

Primary Math
December
31 34
32 35
33 36

Read for 20 minutes

Day 18

Language Arts
December
sh [] [] of [] []
I see

Primary Math
December
31 34
32 35
33 36

Read for 20 minutes

Day 19

Language Arts
December
sh [] [] of [] []
I see

Primary Math
December
31 34
32 35
33 36

Read for 20 minutes

Day 20

Language Arts
December
sh [] [] of [] []
I see

Primary Math
December
31 34
32 35
33 36


Read for 20 minutes

Language Arts

December



Level 1 • Day 1




Name: _____

PHONICS

Write the missing blend.



_____ender_____



_____anket_____



_____ocks_____

SIGHT WORDS

Unscramble the sight words.



adh

toin

WRITING

Rewrite the sentence correctly.

this is my friend janie


READING

Fill in the missing words:

lights


elf

The _____ has a string of _____.

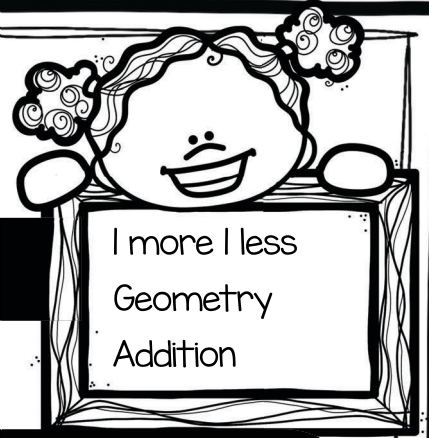


Primary Math

December



Level 1 • Day 1



Name: _____

One MORE
One LESS



22



Write the numbers in the stockings that are one more and one less.

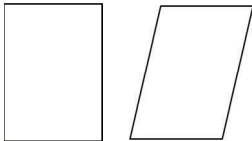
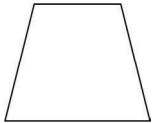


28

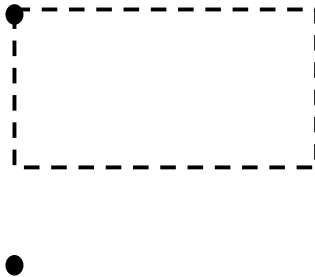


GEOMETRY

Start at the dot and draw 4 shapes that have 4 sides.





EXAMPLES





ADDITION

Count the cookies to find the sum.



$$\begin{array}{r} 7 \\ + 4 \\ \hline \end{array}$$



$$\begin{array}{r} 9 \\ + 5 \\ \hline \end{array}$$




Language Arts

December




Level 1 • Day 2



Name: _____

PHONICS


Write the missing blend.



_____ own _____



_____ ayon _____



_____ ab _____

SIGHT WORDS

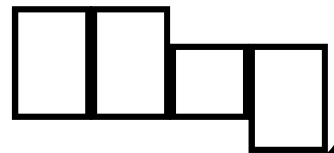
Unscramble the sight words.



onde



yeht



WRITING

Rewrite the sentence correctly.

can we go with you


READING

Fill in the missing words:

nose


He

_____ has a carrot _____ .

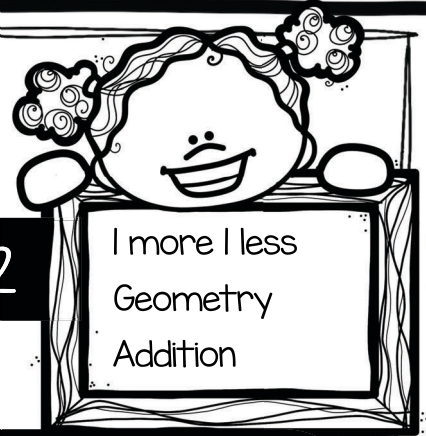


Primary Math

December



Level 1 • Day 2



I more I less
Geometry
Addition

Name: _____

One MORE
One LESS



25



Write the numbers in the stockings that are one more and one less.

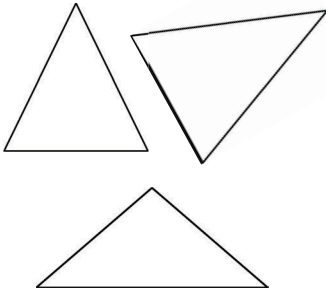


29

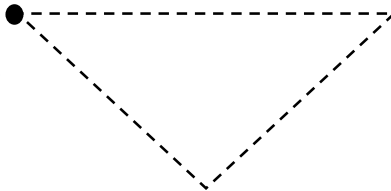


GEOMETRY

Start at the dot and draw 4 shapes that have 3 sides.




EXAMPLES





ADDITION

Count the cookies to find the sum.



$$\begin{array}{r} 10 \\ + 2 \\ \hline \end{array}$$



$$\begin{array}{r} 8 \\ + 7 \\ \hline \end{array}$$




Language Arts

December



Level 1 • Day 3



Name: _____

PHONICS

Write the missing blend.



_____ etzel _____



_____ incess _____



_____ esent _____

SIGHT WORDS

Unscramble the sight words.



orfm



em



WRITING

Rewrite the sentence correctly.

can you see me

READING


Fill in the missing words:

hat

is


Santa's _____

_____ red .

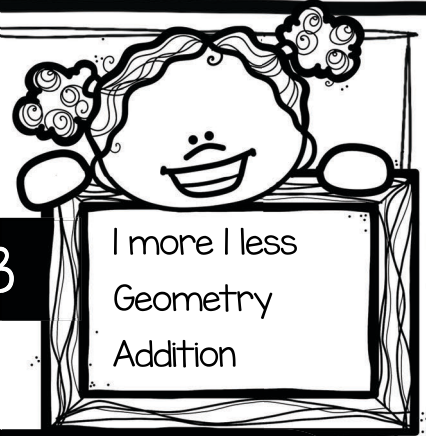


Primary Math

December



Level 1 • Day 3



I more I less
Geometry
Addition

Name: _____

One MORE
One LESS



23



Write the numbers in the stockings that are one more and one less.

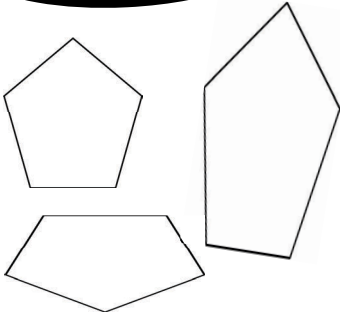


26

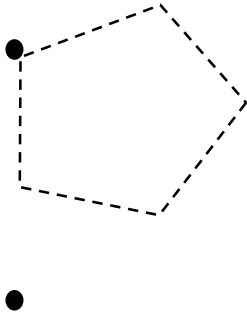


GEOMETRY

Start at the dot and draw 4 shapes that have 5 sides.





EXAMPLES





ADDITION

Count the cookies to find the sum.



$$\begin{array}{r} 5 \\ + 5 \\ \hline \end{array}$$



$$\begin{array}{r} 6 \\ + 6 \\ \hline \end{array}$$




Language Arts

December



Level 1 • Day 4




Name: _____

PHONICS

Write the missing blend.



_____ ink _____



_____ dragon _____



_____ dress _____

SIGHT WORDS

Unscramble the sight words.



seog

| | | |
|--|--|--|
| | | |
|--|--|--|

icen

| | | |
|--|--|--|
| | | |
|--|--|--|

WRITING

Rewrite the sentence correctly.

i like to watch movies

READING

Fill in the missing words:

red

see

I _____ a _____ stocking .

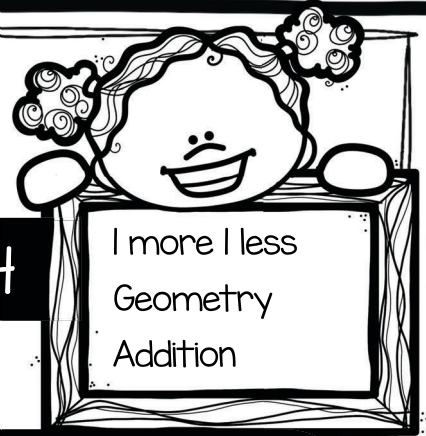


Primary Math

December




Level 1 • Day 4



1 more 1 less
Geometry
Addition

Name: _____

One MORE
One LESS



27



Write the numbers in the stockings that are one more and one less.

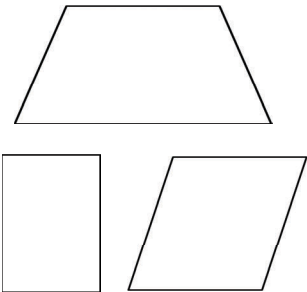


24

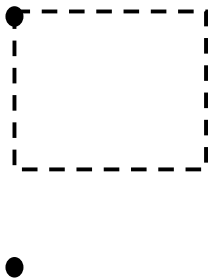


GEOMETRY

Start at the dot and draw 4 shapes that have 4 sides.





EXAMPLES





ADDITION

Count the cookies to find the sum.



$$\begin{array}{r} 4 \\ + 4 \\ \hline \end{array}$$



$$\begin{array}{r} 3 \\ + 3 \\ \hline \end{array}$$




Language Arts

December



Level 1 • Day 5



Name: _____

PHONICS

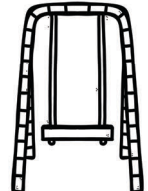
Write the missing blend.



_____ eets _____



_____ eater _____



_____ ing _____

SIGHT WORDS

Unscramble the sight words.



htaa



meht



WRITING

Rewrite the sentence correctly.

jack's birthday is on sunday


READING

Fill in the missing words:

very

fire

The _____ is _____ hot.

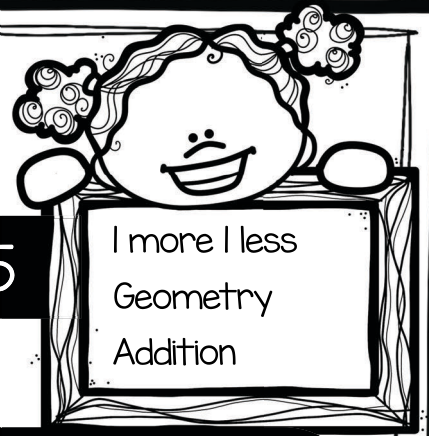


Primary Math

December



Level 1 • Day 5




I more I less
Geometry
Addition

Name: _____

One MORE
One LESS



29



Write the numbers in the stockings that are one more and one less.

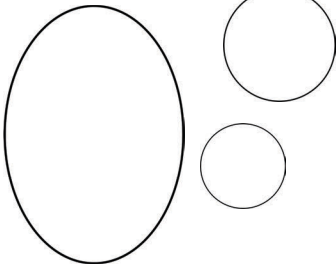


25

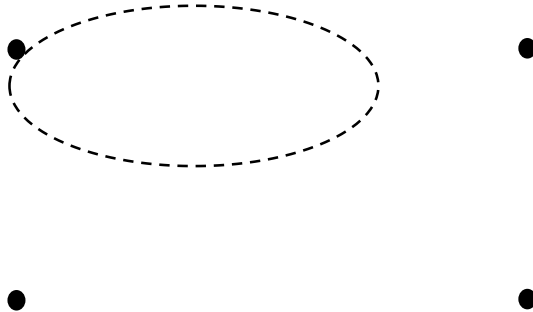


GEOMETRY

Start at the dot and draw 4 shapes that have 1 side.





EXAMPLES





ADDITION

Count the cookies to find the sum.



$$\begin{array}{r} 2 \\ + 2 \\ \hline \end{array}$$



$$\begin{array}{r} 9 \\ + 9 \\ \hline \end{array}$$



STANDARDS BASED and **ENGAGING**
for the entire school year!

Did you love the free week?

CLICK HERE

to purchase the
entire month.



© Keeping My Kiddo Busy 2020 keepingmykiddobusy.com

SAVE BIG

With the year long

BUNDLE

CLICK HERE

